

Continents, Oceans, & Hemispheres

The world is made up of seven large landmasses called continents. Find each continent on the map below. Write its letter in the blank after its name.

1. Asia ____ 3. Europe ____ 5. North America ____ 7. Antarctica ____
 2. Africa ____ 4. Australia ____ 6. South America ____

Greenland is a large landmass but not a continent. It is the largest island in the world and is generally considered to be part of North America. It is a territory of Denmark.

8. Which letter appears on Greenland on the map below? ____

Many geographers divide the world's waters into four oceans. (Some believe the southern parts of the Pacific, Atlantic, and Indian oceans make up a fifth ocean called the Southern Ocean or Antarctic Ocean.) Find the four oceans on the map below. Write their letters in the blanks.

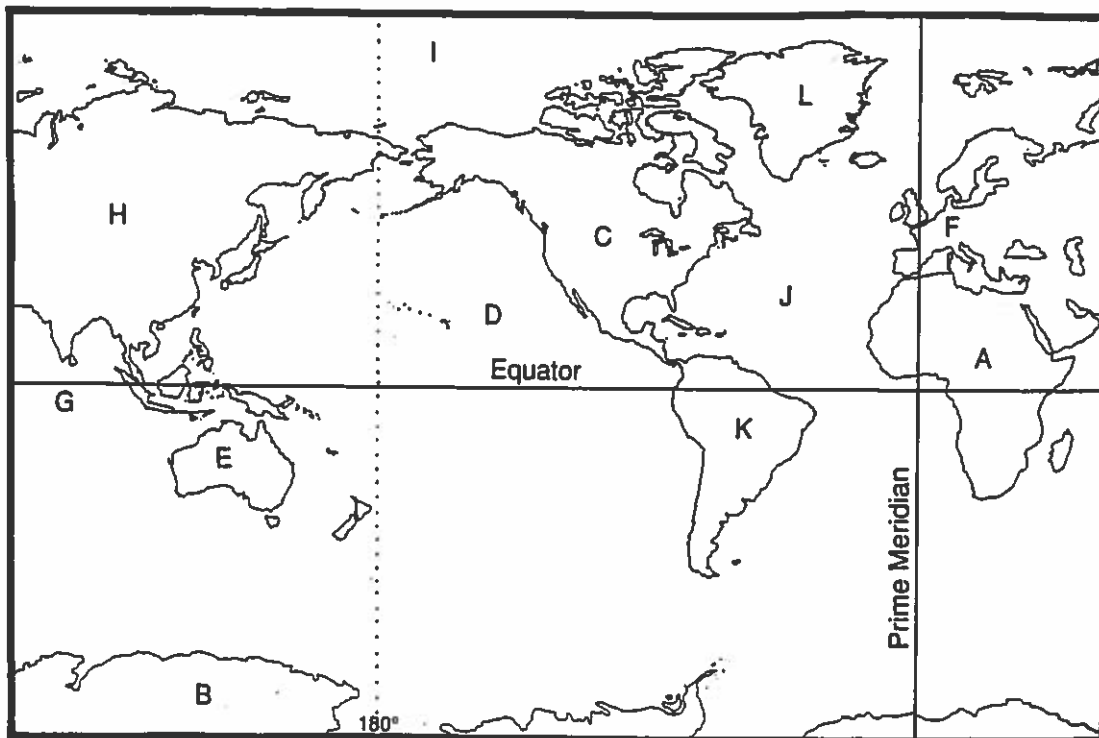
9. Pacific ____ 10. Atlantic ____ 11. Arctic ____ 12. Indian ____

The equator divides the earth in half. The area above the equator is the Northern Hemisphere. The half below the equator is the Southern Hemisphere. The prime meridian divides the earth into the Eastern and Western hemispheres. Locations within 180° west of this line are in the Western Hemisphere. Locations within 180° east of this line are in the Eastern Hemisphere.

13. Which continents are located entirely in the Southern Hemisphere?

14. Which continents are located entirely in the Western Hemisphere?

15. In which hemispheres is Africa located? _____



Hemispheres

Fill in the name of each hemisphere.

1. _____ Hemisphere



2. _____ Hemisphere



3. _____ Hemisphere



4. _____ Hemisphere



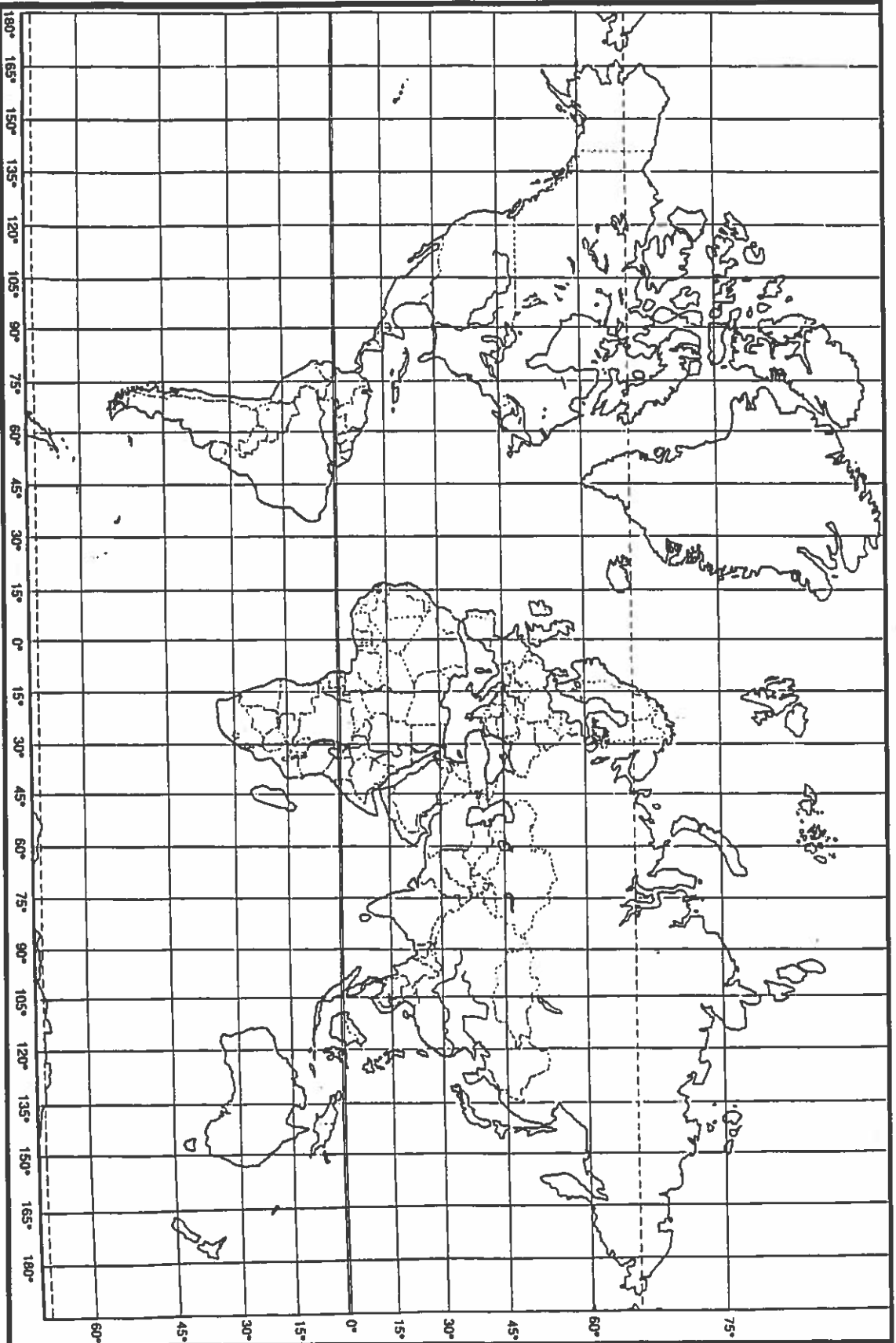
5. Which continents lie entirely in the Northern Hemisphere? _____

6. Which continents lie entirely in the Southern Hemisphere? _____

7. Which continents lie almost entirely in the Eastern Hemisphere? _____

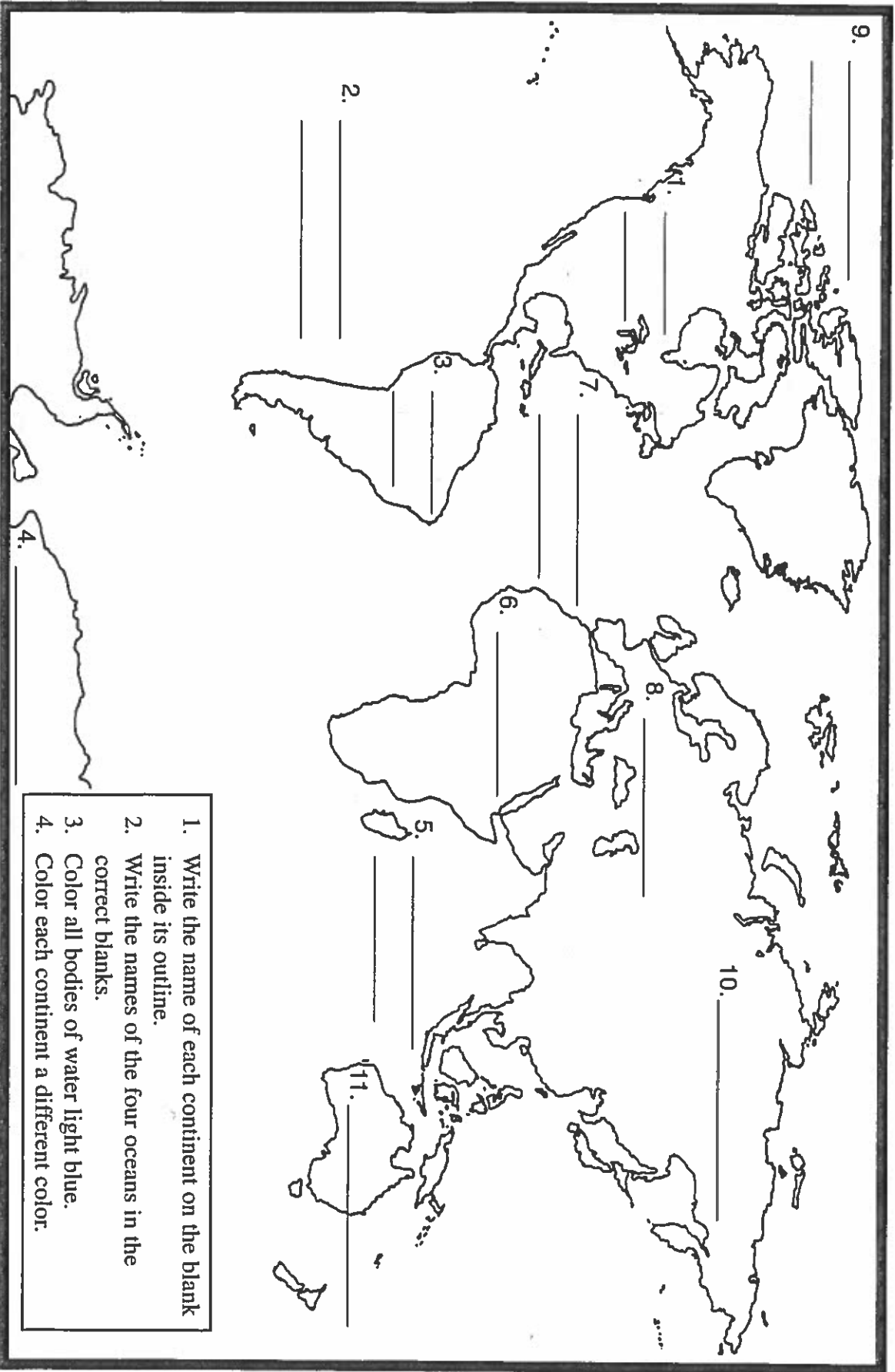
8. Which continents lie entirely in the Western Hemisphere? _____

Where In the World?



1. Label the equator, the prime meridian, the Antarctic Circle, and the Arctic Circle.
2. Write the continents that lie in the following locations:
 - A. 60°W , 30°S _____
 - B. 135°E , 30°S _____
 - C. 105°W , 45°N _____
 - D. 30°E , 15°N _____
 - E. 105°E , 60°N _____
 - F. 10°E , 47°N _____
3. Write the latitudes and longitudes of five countries. (List the countries and their latitudes and longitudes on the back of this page.)

The World



1. Write the name of each continent on the blank inside its outline.
2. Write the names of the four oceans in the correct blanks.
3. Color all bodies of water light blue.
4. Color each continent a different color.